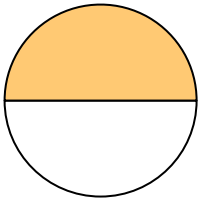





Write the shaded amount as a fraction.

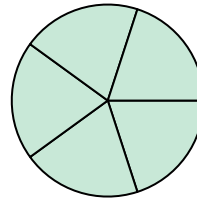
Ex)



1)



2)

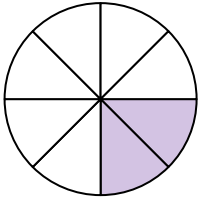


Answers


Ex. $\frac{1}{2}$

- 1. _____
- 2. _____
- 3. _____
- 4. _____
- 5. _____
- 6. _____
- 7. _____
- 8. _____
- 9. _____
- 10. _____
- 11. _____
- 12. _____
- 13. _____
- 14. _____


3)



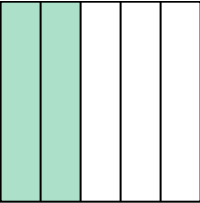
4)




5)



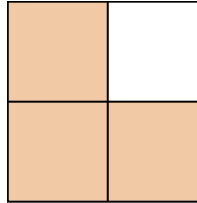
6)




7)




8)




9)



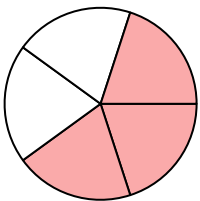
10)




11)



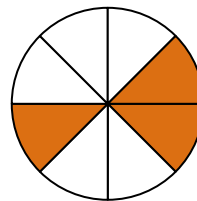
12)



13)



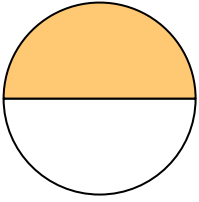
14)






Write the shaded amount as a fraction.

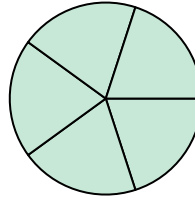
Ex)



1)



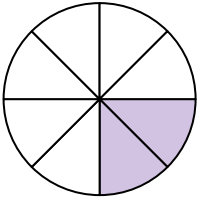
2)




Answers

Ex. $\frac{1}{2}$


3)



4)



5)



1. $\frac{3}{3}$

2. $\frac{5}{5}$

3. $\frac{2}{8}$

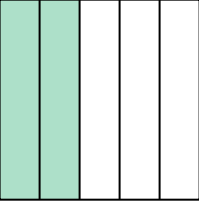
4. $\frac{3}{3}$

5. $\frac{1}{8}$


6. $\frac{2}{5}$

7. $\frac{4}{4}$

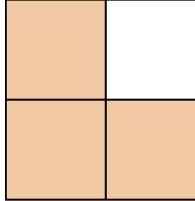
6)



7)



8)




8. $\frac{3}{4}$

9. $\frac{2}{2}$


10. $\frac{4}{4}$

11. $\frac{3}{3}$


9)



10)



11)

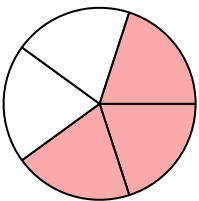


12. $\frac{3}{5}$


13. $\frac{1}{2}$

14. $\frac{3}{8}$

12)



13)



14)

